

I have three 5p coins in my purse. How much money do I have altogether?



twinkl.co.uk

I have 50p. All my coins are 10ps. How many coins do I have?




twinkl.co.uk

In a relay race, 4 children swim 2 lengths each. How many lengths are swum altogether?



twinkl.co.uk

I look after 5 dogs. I have 30 biscuits to share equally between them. How many biscuits can I give to each dog?




twinkl.co.uk

4 groups of children go on a school trip. There are 10 children in each group. How many children go on the trip?



twinkl.co.uk

Adults can take 5 children each to the cinema in their cars. If 40 children are going to the cinema how many cars are needed to take them?




twinkl.co.uk

I buy 6 bottles of lemonade. If there are 2 litres in each bottle, how many litres of lemonade have I bought?




twinkl.co.uk

When I plant my onions, I plant 6 rows and put 10 onions in each row. How many onions do I plant?




twinkl.co.uk

I plant 80 carrots, 10 in each row. How many rows of carrots do I plant?



twinkl.co.uk

I buy 8 packets of sweets. There are 5 sweets in each packet. How many sweets do I have?



twinkl.co.uk

I bake 50 buns. If I put 5 in each bag for my school cake stall how many bags will I fill?



twinkl.co.uk

I have 20 spare football cards. I share them equally between my 5 friends. How many cards will they get each?



twinkl.co.uk

There are 20 sunflower seeds in a packet. If I divide them equally between 10 pots, how many seeds will be in each pot?



twinkl.co.uk

There are 20 sunflower seeds in a packet. If I put 2 seeds in each pot, how many pots will I fill?



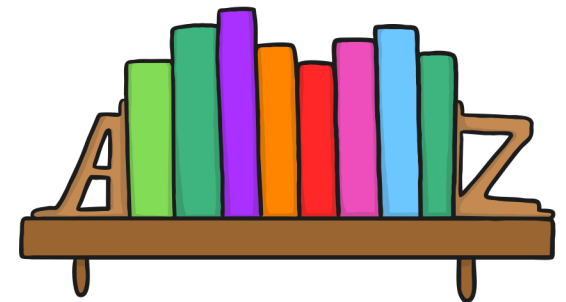
twinkl.co.uk

The whole school goes on a trip. There are 80 people and 10 people can fit in a minibus. How many minibuses will the school need to book?



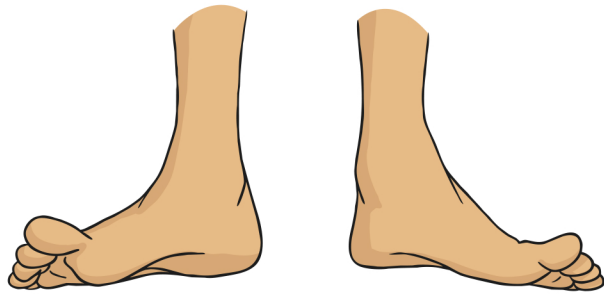
twinkl.co.uk

My bookcase has 10 shelves with 10 books on each. How many books are on my bookcase?



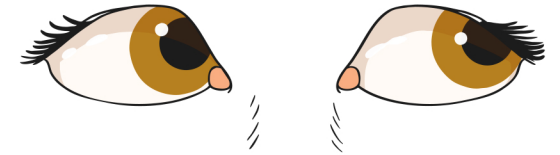
twinkl.co.uk

How many toes are there on 5 children?



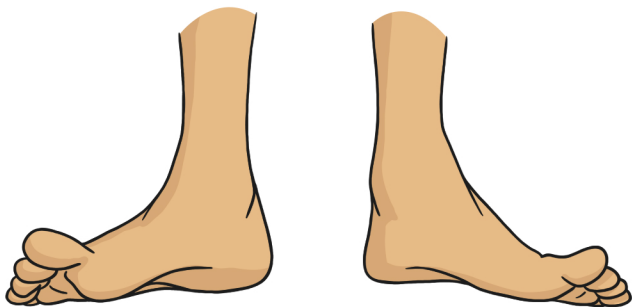
twinkl.co.uk

I can see 10 eyes. How many people can I see?



twinkl.co.uk

How many feet are there on 8 children?



twinkl.co.uk

I can see 18 hands. How many people can I see?



twinkl.co.uk